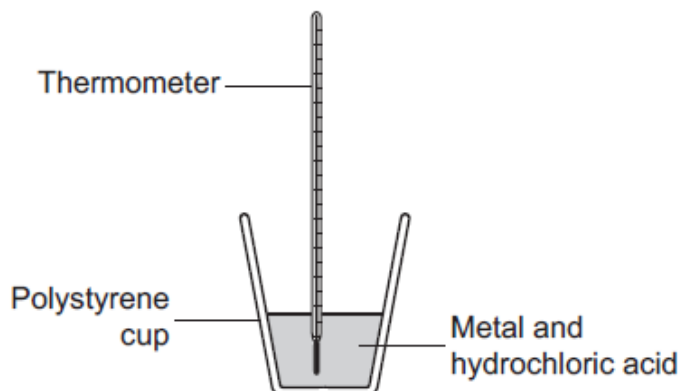


**GCSE Chemistry A (Gateway Science)**

**J248/01** Chemistry A C1-C3 and C7 (Foundation Tier)

**Question Set 28**

1 A student investigates the reaction of different metals with hydrochloric acid.

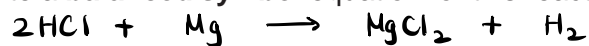


(a) (i) The student notices that the **temperature rises** when a metal is added to the acid.

What name is given to this type of reaction when the temperature rises? [1]  
*exothermic*

(ii) The metal magnesium reacts with hydrochloric acid, HCl, to form magnesium chloride, MgCl<sub>2</sub>, and hydrogen.

Write a **balanced symbol** equation for this reaction. [2]



(iii) The experiment is repeated with aluminium and hydrochloric acid.

Write down the **name** of the **salt** produced in this reaction. [1]

*Aluminium chloride*

(b) The student repeats the experiment with different metals.

She repeats the experiment three times for each metal.

She measures the temperature change in each experiment.

Look at her results.

Metal	Temperature change (°C)		
	Test 1	Test 2	Test 3
Magnesium	10.3	10.5	10.2
Zinc	8.6	8.7	7.6
Iron	5.2	4.9	5.1

(i) One of the student's results is anomalous.

Put a ring around the anomalous result in the table. [1]

(ii) Suggest a reason why the result could be anomalous. [1]

Didn't sufficiently stir the reactants compared to test 1 & 2

(iii) Calculate the mean temperature change for magnesium.

Give your answer to 1 decimal place.

$$\frac{10.3 + 10.5 + 10.2}{3} = 10.3$$

Mean temperature change = 10.3 °C [2]

(c) (i) The student wants to improve her experiment to get more accurate results.

Suggest an improvement to her experiment, which will give more accurate results.

Give a reason for the improvement.

Improvement ..... Place a lid with a small hole for thermometer.....

Reason ..... To reduce heat loss.....

[2]

(ii) The student concludes that the more reactive the metal is, the higher the temperature rise.

Describe further tests the student can do to confirm her conclusion.

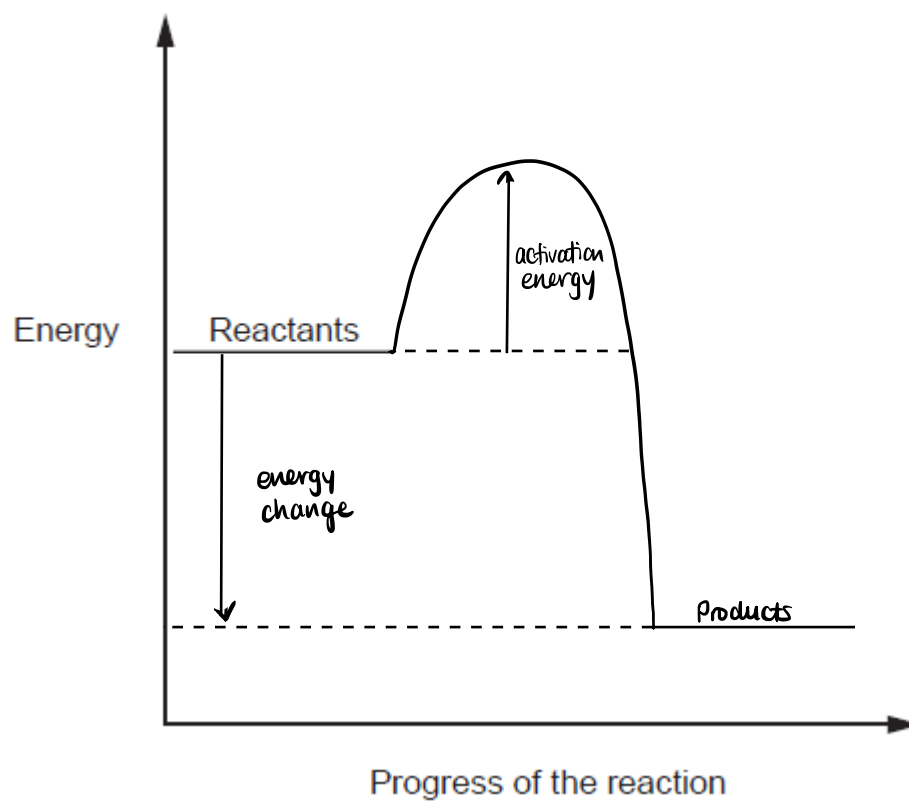
Add calcium (which is more reactive than magnesium) into [2]

(d) A reaction profile shows the energy involved in a reaction. acid and measure temperature change.

Draw the reaction profile for the reaction between magnesium and hydrochloric acid.

Label the:

- products
- energy change
- activation energy.



[3]

**Total Marks for Question Set 28: 15**

---

# OCR

Oxford Cambridge and RSA

## Copyright Information

OCR is committed to seeking permission to reproduce all third-party content that it uses in its assessment materials. OCR has attempted to identify and contact all copyright holders whose work is used in this paper. To avoid the issue of disclosure of answer-related information to candidates, all copyright acknowledgements are reproduced in the OCR Copyright Acknowledgements Booklet. This is produced for each series of examinations and is freely available to download from our public website ([www.ocr.org.uk](http://www.ocr.org.uk)) after the live examination series.

If OCR has unwittingly failed to correctly acknowledge or clear any third-party content in this assessment material, OCR will be happy to correct its mistake at the earliest possible opportunity.

For queries or further information please contact The OCR Copyright Team, The Triangle Building, Shaftesbury Road, Cambridge CB2 8EA.

OCR is part of the Cambridge Assessment Group; Cambridge Assessment is the brand name of University of Cambridge Local Examinations Syndicate (UCLES), which is itself a department of the University of Cambridge